


Draw The Phases




Students Information:

The moon orbits, or moves, around the earth. How the moon looks from the earth changes from night to night. These changes are called the phases of the moon. As the moon goes through its phases, you can only see the part of the moon that reflects light from the sun. Finish the illustration and draw the phases of the moon below.


Full Moon



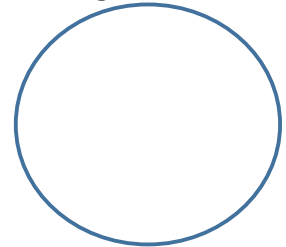
Waning Gibbous




Last Quarter




Waning Crescent




New Moon




Waxing Crescent



First Quarter



Waxing Gibbous



Answer This:

Why are there some nights where we can't see the moon at all? What phase is this?

